




Solve each problem.


Answers

1) Which letter best shows -96?



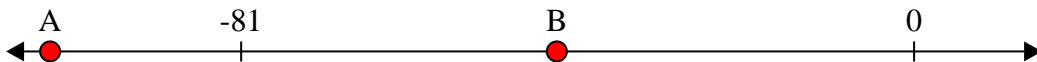
1. _____

2) Which letter best shows -40?




2. _____

3) Which letter best shows -104?




3. _____

4) Which letter best shows -49?



4. _____

5) Which letter best shows -110?




5. _____

6) Which letter best shows -24?




6. _____

7) Which letter best shows -72?




7. _____

8) Which letter best shows -39?




8. _____

9) Which letter best shows -95?



9. _____

10) Which letter best shows -102?



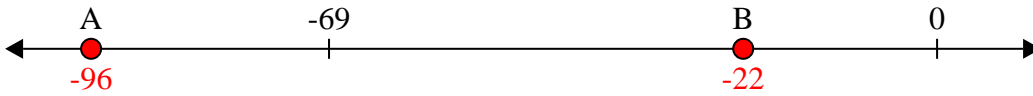
10. _____



Solve each problem.

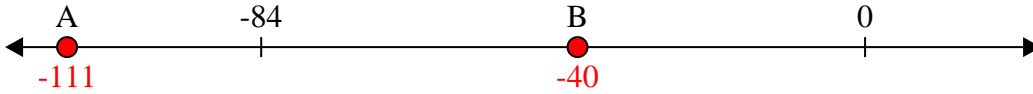
Answers

1) Which letter best shows -96?



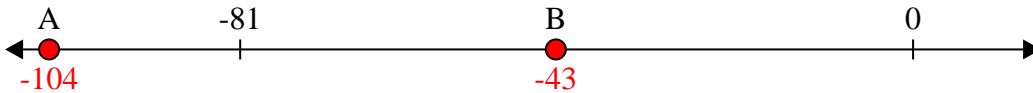
1. **A**

2) Which letter best shows -40?



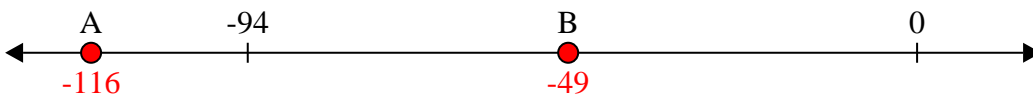
2. **B**

3) Which letter best shows -104?



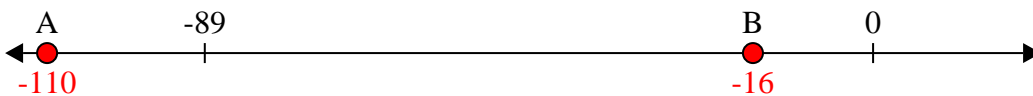
3. **A**

4) Which letter best shows -49?




4. **B**

5) Which letter best shows -110?




5. **A**

6) Which letter best shows -24?



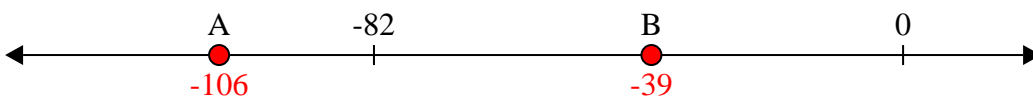
6. **B**

7) Which letter best shows -72?




7. **A**

8) Which letter best shows -39?



8. **B**

9) Which letter best shows -95?



9. **A**

10) Which letter best shows -102?




10. **A**



Solve each problem.


Answers

1) Which letter best shows -28?




1. _____

2) Which letter best shows -67?




2. _____

3) Which letter best shows -19?




3. _____

4) Which letter best shows -117?




4. _____

5) Which letter best shows -27?




5. _____

6) Which letter best shows -21?




6. _____

7) Which letter best shows -124?




7. _____

8) Which letter best shows -94?



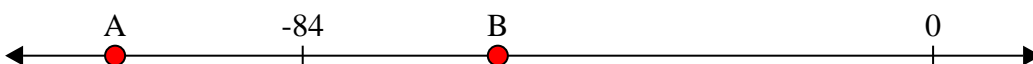
8. _____

9) Which letter best shows -82?



9. _____

10) Which letter best shows -109?



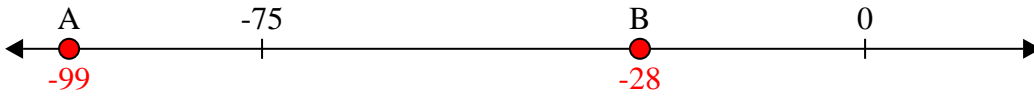
10. _____



Solve each problem.

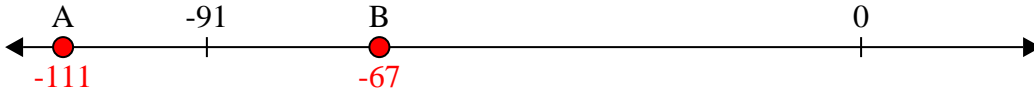
Answers

1) Which letter best shows -28?



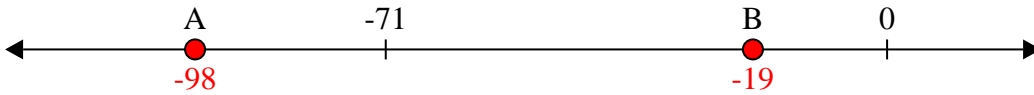
1. **B**

2) Which letter best shows -67?



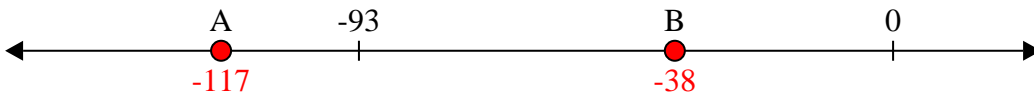
2. **B**

3) Which letter best shows -19?



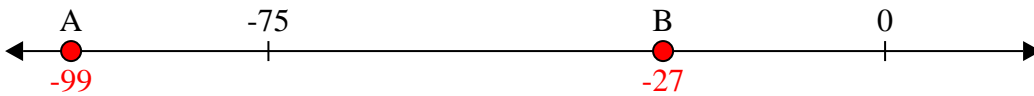
3. **B**

4) Which letter best shows -117?




4. **A**

5) Which letter best shows -27?



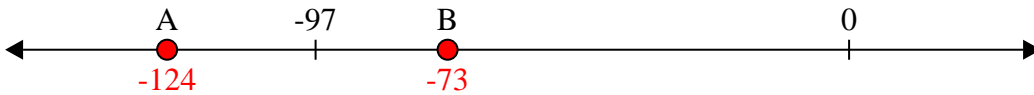
5. **B**

6) Which letter best shows -21?



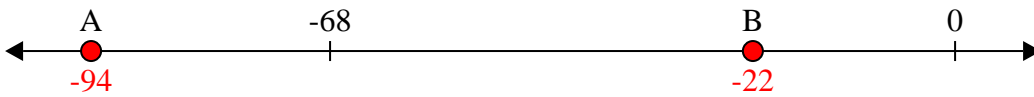
6. **B**

7) Which letter best shows -124?



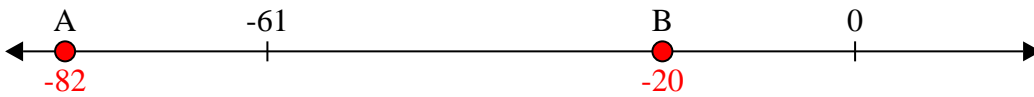
7. **A**

8) Which letter best shows -94?



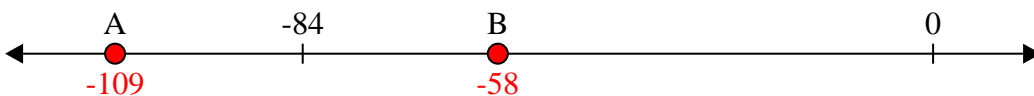
8. **A**

9) Which letter best shows -82?



9. **A**

10) Which letter best shows -109?



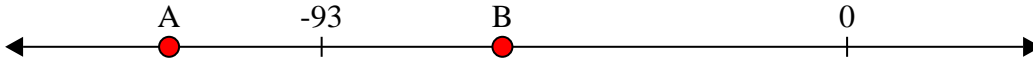
10. **A**



Solve each problem.

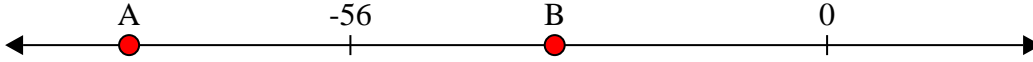
Answers

1) Which letter best shows -120?




1. _____

2) Which letter best shows -82?




2. _____

3) Which letter best shows -84?



3. _____

4) Which letter best shows -17?




4. _____

5) Which letter best shows -67?




5. _____

6) Which letter best shows -30?




6. _____

7) Which letter best shows -27?



7. _____

8) Which letter best shows -93?




8. _____

9) Which letter best shows -18?



9. _____

10) Which letter best shows -99?



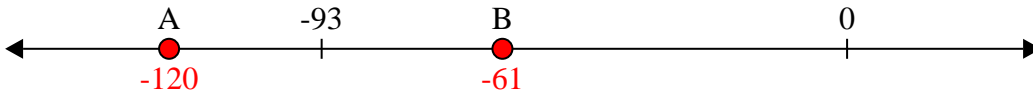
10. _____



Solve each problem.

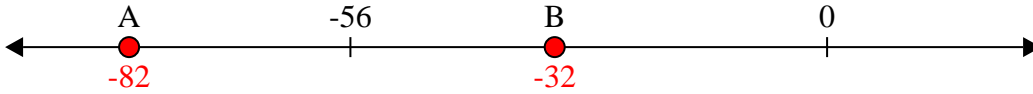
Answers

1) Which letter best shows -120?



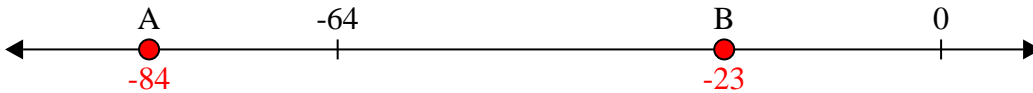
1. **A**

2) Which letter best shows -82?




2. **A**

3) Which letter best shows -84?



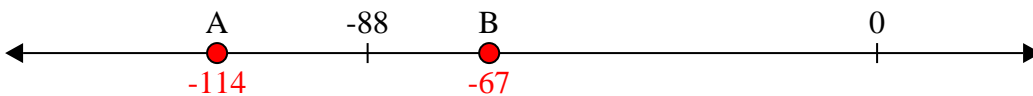
3. **A**

4) Which letter best shows -17?




4. **B**

5) Which letter best shows -67?




5. **B**

6) Which letter best shows -30?



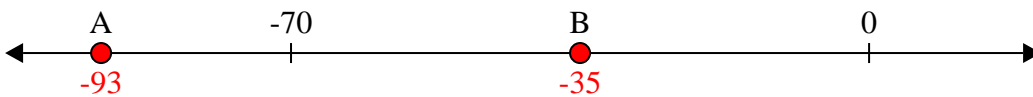
6. **B**

7) Which letter best shows -27?




7. **B**

8) Which letter best shows -93?




8. **A**

9) Which letter best shows -18?



9. **B**

10) Which letter best shows -99?



10. **A**



Solve each problem.

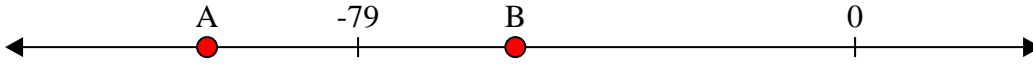
Answers

1) Which letter best shows -48?




1. _____

2) Which letter best shows -103?




2. _____

3) Which letter best shows -88?




3. _____

4) Which letter best shows -125?



4. _____

5) Which letter best shows -71?




5. _____

6) Which letter best shows -74?




6. _____

7) Which letter best shows -28?



7. _____

8) Which letter best shows -104?




8. _____

9) Which letter best shows -114?



9. _____

10) Which letter best shows -15?

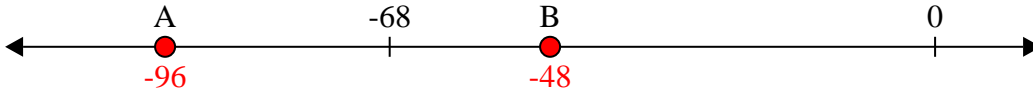


10. _____

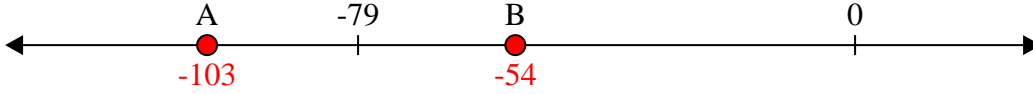


Solve each problem.

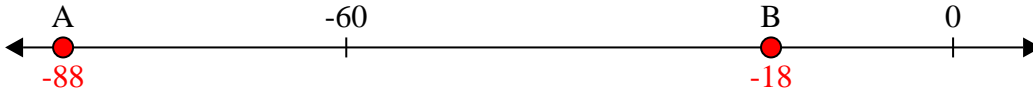
1) Which letter best shows -48?



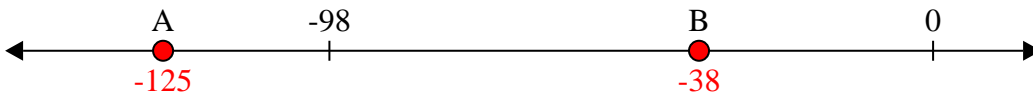
2) Which letter best shows -103?



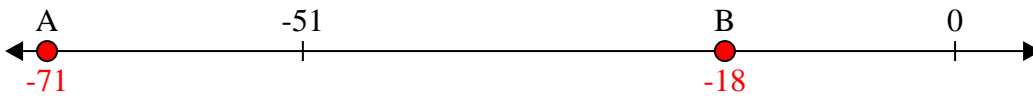
3) Which letter best shows -88?




4) Which letter best shows -125?




5) Which letter best shows -71?



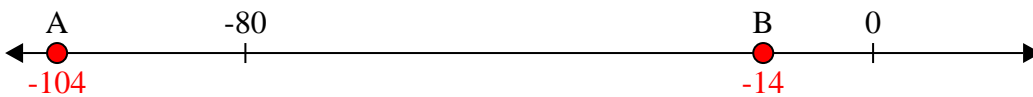
6) Which letter best shows -74?



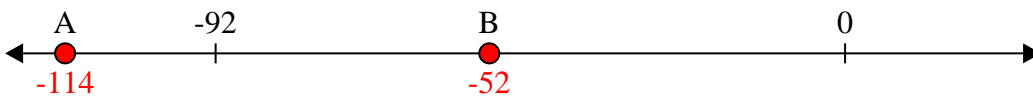
7) Which letter best shows -28?




8) Which letter best shows -104?



9) Which letter best shows -114?



10) Which letter best shows -15?



Answers


1. **B**
2. **A**
3. **A**
4. **A**
5. **A**
6. **A**
7. **B**
8. **A**
9. **A**
10. **B**



Solve each problem.


Answers

1) Which letter best shows -97?




1. _____

2) Which letter best shows -115?



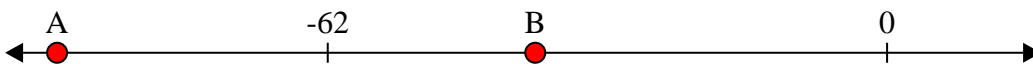
2. _____

3) Which letter best shows -22?




3. _____

4) Which letter best shows -92?




4. _____

5) Which letter best shows -25?




5. _____

6) Which letter best shows -25?




6. _____

7) Which letter best shows -113?




7. _____

8) Which letter best shows -110?




8. _____

9) Which letter best shows -29?



9. _____

10) Which letter best shows -16?



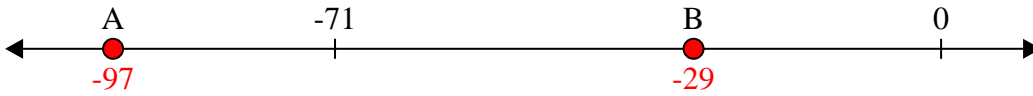
10. _____



Solve each problem.

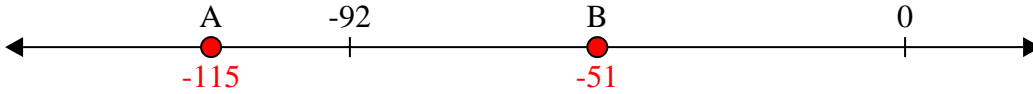
Answers

1) Which letter best shows -97?



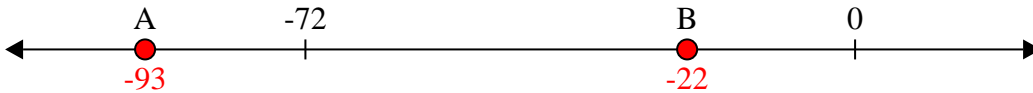
1. A

2) Which letter best shows -115?



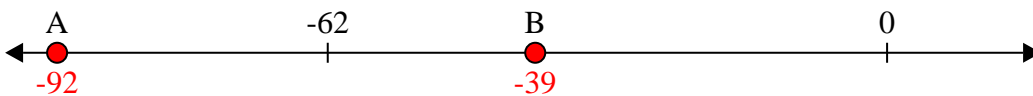
2. A

3) Which letter best shows -22?



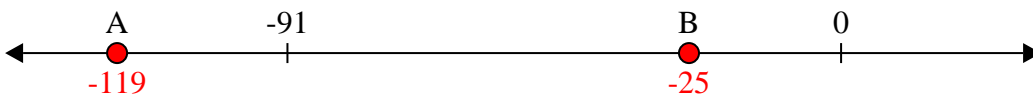
3. B

4) Which letter best shows -92?




4. A

5) Which letter best shows -25?




5. B

6) Which letter best shows -25?



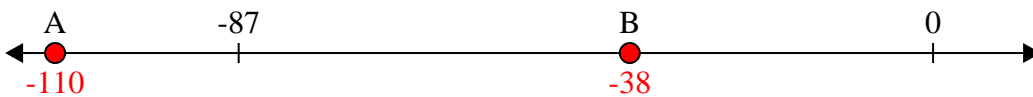
6. B

7) Which letter best shows -113?




7. A

8) Which letter best shows -110?




8. A

9) Which letter best shows -29?



9. B

10) Which letter best shows -16?




10. B



Solve each problem.


Answers

1) Which letter best shows -15?




1. _____

2) Which letter best shows -123?




2. _____

3) Which letter best shows -119?




3. _____

4) Which letter best shows -123?




4. _____

5) Which letter best shows -95?




5. _____

6) Which letter best shows -13?




6. _____

7) Which letter best shows -35?



7. _____

8) Which letter best shows -31?




8. _____

9) Which letter best shows -21?



9. _____

10) Which letter best shows -13?

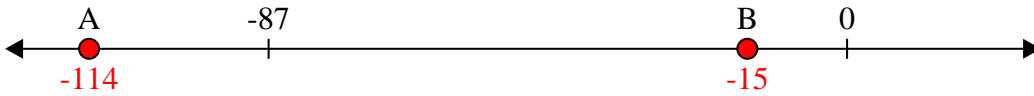


10. _____



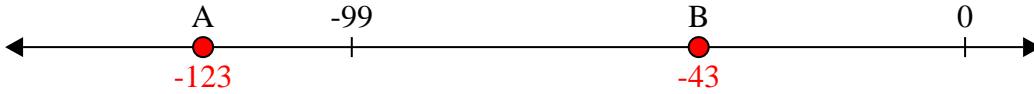
Solve each problem.

1) Which letter best shows -15?



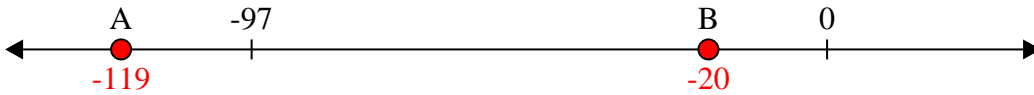
1. **B**

2) Which letter best shows -123?




2. **A**

3) Which letter best shows -119?



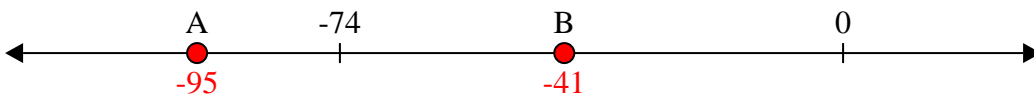
3. **A**

4) Which letter best shows -123?




4. **A**

5) Which letter best shows -95?




5. **A**

6) Which letter best shows -13?



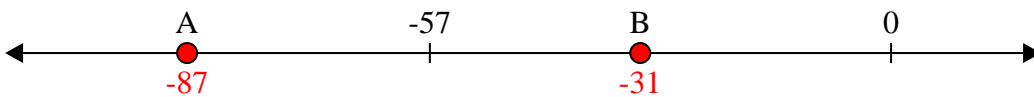
6. **B**

7) Which letter best shows -35?




7. **B**

8) Which letter best shows -31?



8. **B**

9) Which letter best shows -21?



9. **B**

10) Which letter best shows -13?



10. **B**

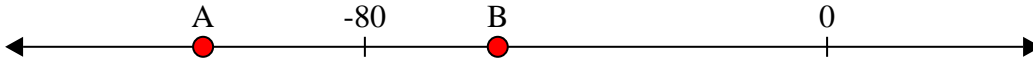
Answers



Solve each problem.


Answers

1) Which letter best shows -108?




1. _____

2) Which letter best shows -14?




2. _____

3) Which letter best shows -101?




3. _____

4) Which letter best shows -11?




4. _____

5) Which letter best shows -14?




5. _____

6) Which letter best shows -115?




6. _____

7) Which letter best shows -25?



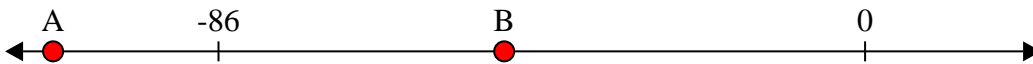
7. _____

8) Which letter best shows -56?




8. _____

9) Which letter best shows -108?



9. _____

10) Which letter best shows -113?



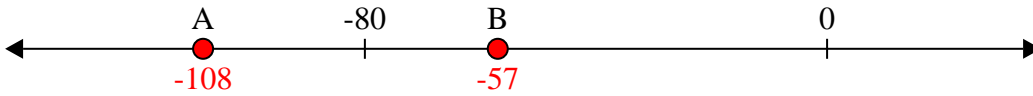
10. _____



Solve each problem.

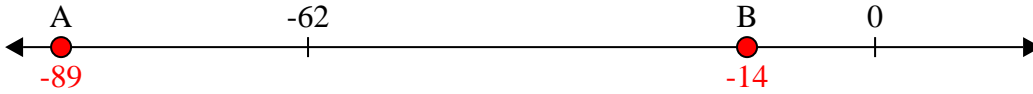
Answers

1) Which letter best shows -108?



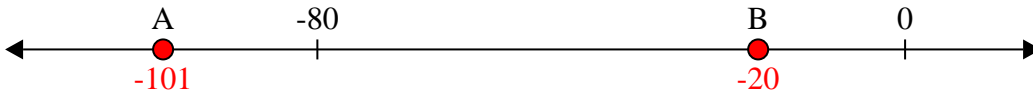
1. **A**

2) Which letter best shows -14?



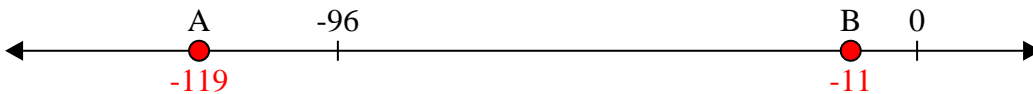
2. **B**

3) Which letter best shows -101?



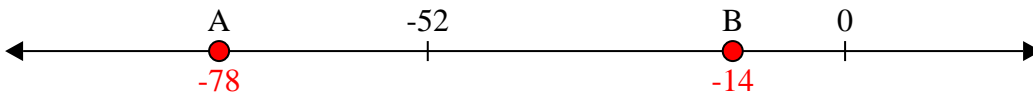
3. **A**

4) Which letter best shows -11?



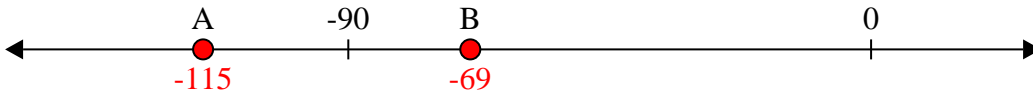
4. **B**

5) Which letter best shows -14?




5. **B**

6) Which letter best shows -115?



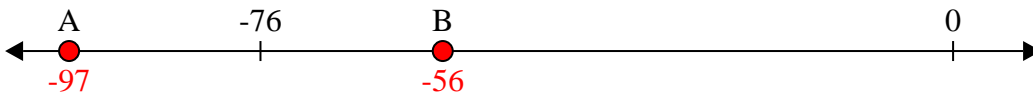
6. **A**

7) Which letter best shows -25?



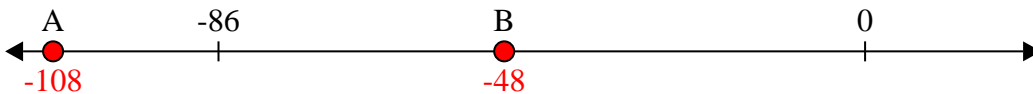
7. **B**

8) Which letter best shows -56?




8. **B**

9) Which letter best shows -108?



9. **A**

10) Which letter best shows -113?




10. **A**



Solve each problem.


Answers

1) Which letter best shows -83?




1. _____

2) Which letter best shows -117?



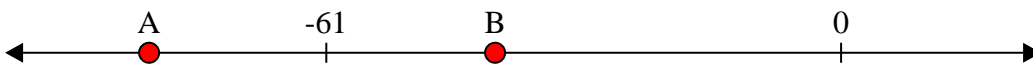
2. _____

3) Which letter best shows -21?




3. _____

4) Which letter best shows -41?




4. _____

5) Which letter best shows -19?




5. _____

6) Which letter best shows -95?




6. _____

7) Which letter best shows -114?




7. _____

8) Which letter best shows -40?



8. _____

9) Which letter best shows -43?



9. _____

10) Which letter best shows -29?



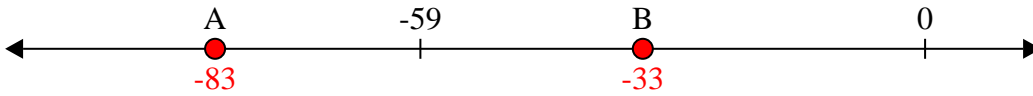
10. _____



Solve each problem.

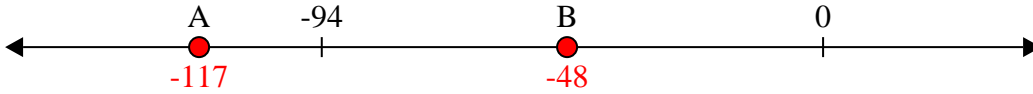
Answers

1) Which letter best shows -83?



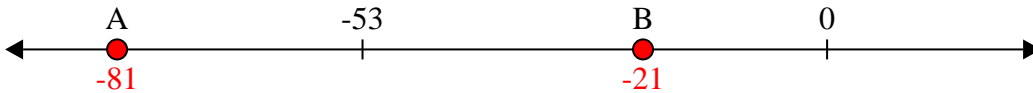
1. A

2) Which letter best shows -117?



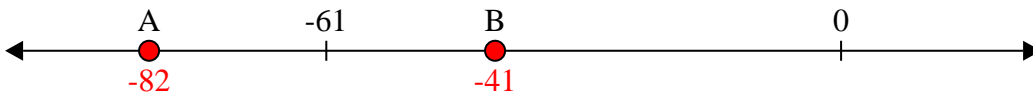
2. A

3) Which letter best shows -21?



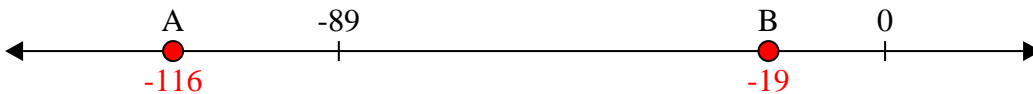
3. B

4) Which letter best shows -41?



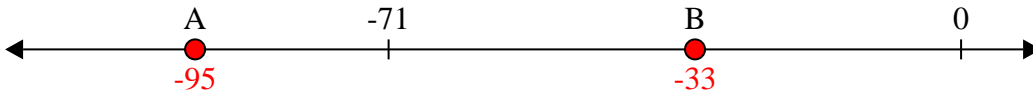
4. B

5) Which letter best shows -19?




5. B

6) Which letter best shows -95?



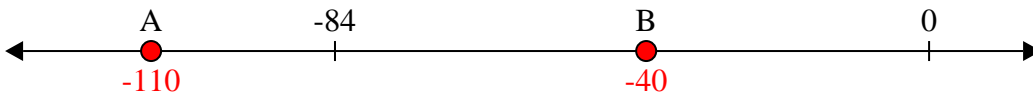
6. A

7) Which letter best shows -114?



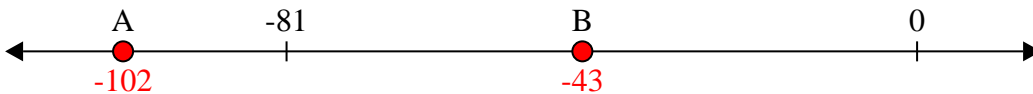
7. A

8) Which letter best shows -40?




8. B

9) Which letter best shows -43?



9. B

10) Which letter best shows -29?




10. B



Solve each problem.


Answers

1) Which letter best shows -117?




1. _____

2) Which letter best shows -113?




2. _____

3) Which letter best shows -38?




3. _____

4) Which letter best shows -58?




4. _____

5) Which letter best shows -93?




5. _____

6) Which letter best shows -22?



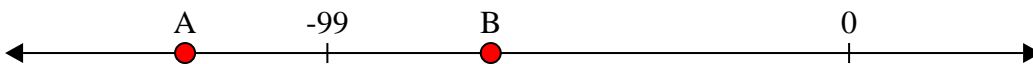
6. _____

7) Which letter best shows -96?



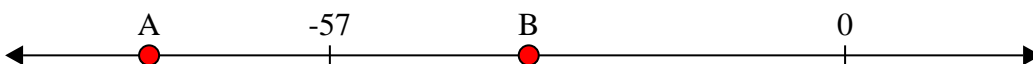
7. _____

8) Which letter best shows -68?




8. _____

9) Which letter best shows -35?



9. _____

10) Which letter best shows -27?



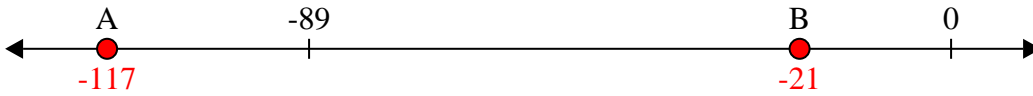
10. _____



Solve each problem.

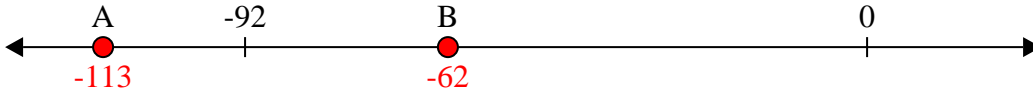
Answers

1) Which letter best shows -117?



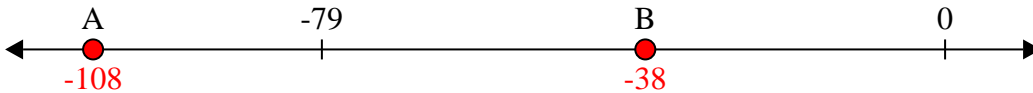
1. **A**

2) Which letter best shows -113?




2. **A**

3) Which letter best shows -38?



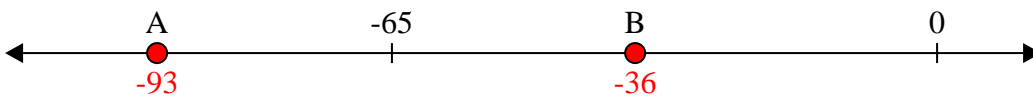
3. **B**

4) Which letter best shows -58?




4. **B**

5) Which letter best shows -93?




5. **A**

6) Which letter best shows -22?



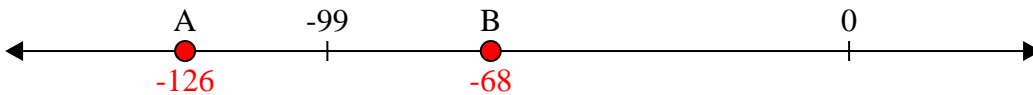
6. **B**

7) Which letter best shows -96?



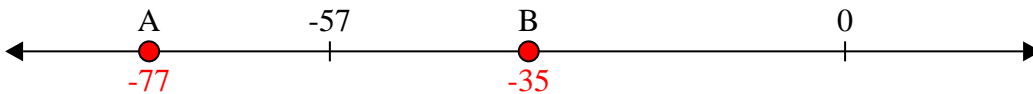
7. **A**

8) Which letter best shows -68?




8. **B**

9) Which letter best shows -35?



9. **B**

10) Which letter best shows -27?



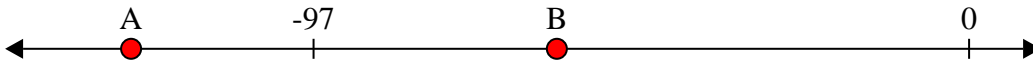
10. **B**



Solve each problem.


Answers

1) Which letter best shows -61?




1. _____

2) Which letter best shows -29?




2. _____

3) Which letter best shows -39?




3. _____

4) Which letter best shows -30?




4. _____

5) Which letter best shows -123?




5. _____

6) Which letter best shows -54?




6. _____

7) Which letter best shows -24?




7. _____

8) Which letter best shows -118?




8. _____

9) Which letter best shows -30?



9. _____

10) Which letter best shows -119?

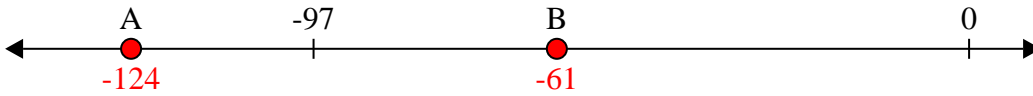


10. _____

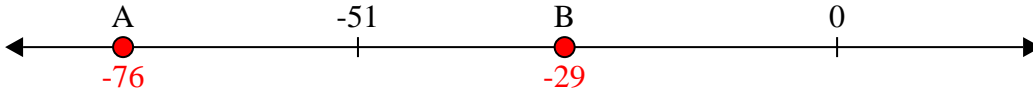


Solve each problem.

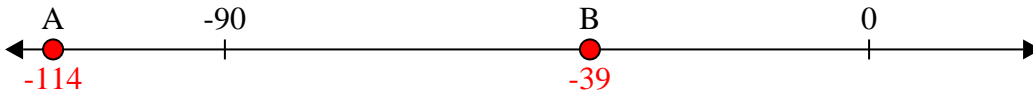
1) Which letter best shows -61?



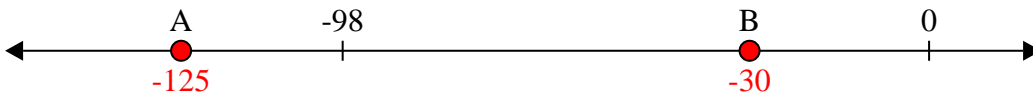
2) Which letter best shows -29?



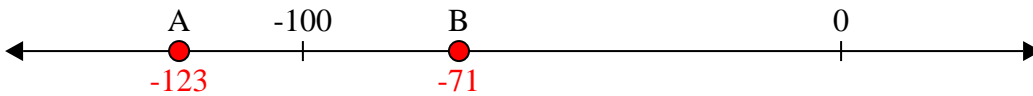
3) Which letter best shows -39?




4) Which letter best shows -30?



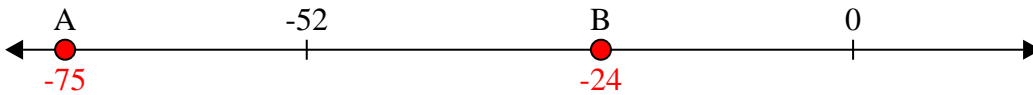
5) Which letter best shows -123?



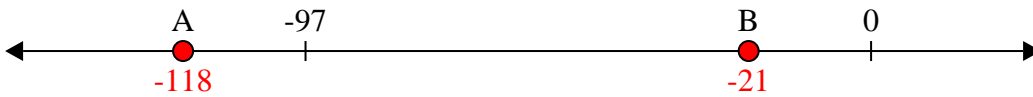
6) Which letter best shows -54?



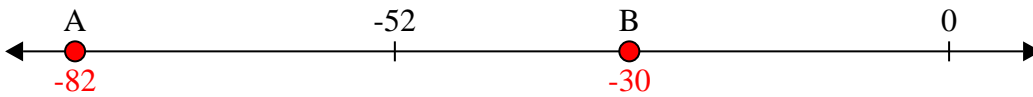
7) Which letter best shows -24?




8) Which letter best shows -118?



9) Which letter best shows -30?



10) Which letter best shows -119?



Answers

1. **B**
2. **B**
3. **B**
4. **B**
5. **A**
6. **B**
7. **B**
8. **A**
9. **B**
10. **A**